

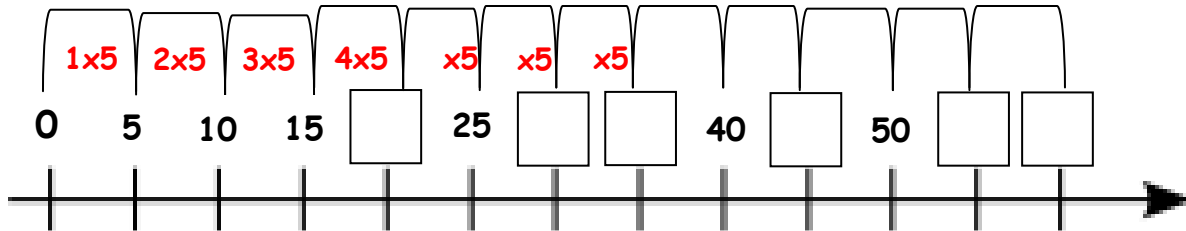



## 5x Table - Number Lines!

You can use a number line to help you to count in **steps of 5**.

Remember to fill in the **jumps** too!

Fill in the blanks on this number line to see how it works!



Now use the jumps on your number line to help you to answer these 5x table questions.

A.  $5 \times 5 =$

B.  $2 \times 5 =$

C.  $11 \times 5 =$

D.  $1 \times 5 =$

E.  $4 \times 5 =$

F.  $10 \times 5 =$

G.  $8 \times 5 =$

H.  $3 \times 5 =$

I.  $6 \times 5 =$

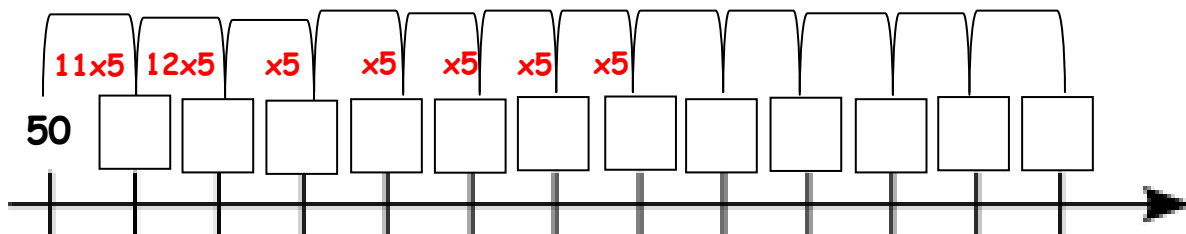
J.  $12 \times 5 =$

K.  $7 \times 5 =$

L.  $9 \times 5 =$

### Challenge!

Can you use the number line below to continue the 5x table, starting from 50 (10x5)?



### Extra Challenge!

Use what you know to work out:

A.  $30 \times 5 =$

B.  $40 \times 5 =$

C.  $25 \times 5 =$

D.  $100 \times 5 =$

E.  $70 \times 5 =$

F.  $200 \times 5 =$

